

Write your name here

Surname	Other names
---------	-------------

Pearson Edexcel
International
Advanced Level

Centre Number

--	--	--	--	--

Candidate Number

--	--	--	--	--

Mechanics M2

Advanced/Advanced Subsidiary

Sample Assessment Material
Time: 1 hour 30 minutes

Paper Reference

WME02/01

You must have:

Mathematical Formulae and Statistical Tables (Blue)

Total Marks

--

Candidates may use any calculator allowed by the regulations of the Joint Council for Qualifications. Calculators must not have the facility for symbolic algebra manipulation, differentiation and integration, or have retrievable mathematical formulae stored in them.

Instructions

- Use **black** ink or ball-point pen.
- If pencil is used for diagrams/sketches/graphs it must be dark (HB or B). Coloured pencils and highlighter pens must not be used.
- **Fill in the boxes** at the top of this page with your name, centre number and candidate number.
- Answer **all** questions and ensure that your answers to parts of questions are clearly labelled.
- Answer the questions in the spaces provided
– *there may be more space than you need.*
- You should show sufficient working to make your methods clear. Answers without working may not gain full credit.
- Whenever a numerical value of g is required, take $g = 9.8 \text{ m s}^{-2}$, and give your answer to either two significant figures or three significant figures.
- When a calculator is used, the answer should be given to an appropriate degree of accuracy.

Information

- The total mark for this paper is 75.
- The marks for **each** question are shown in brackets
– *use this as a guide as to how much time to spend on each question.*

Advice

- Read each question carefully before you start to answer it.
- Try to answer every question.
- Check your answers if you have time at the end.

Turn over ►

S45005A

©2013 Pearson Education Ltd.



S 4 5 0 0 5 A 0 1 3 2

PEARSON

2. A particle P of mass 0.6 kg is released from rest and slides down a line of greatest slope of a rough plane. The plane is inclined at 30° to the horizontal. When P has moved 12 m , its speed is 4 m s^{-1} . Given that friction is the only non-gravitational resistive force acting on P , find

(a) the work done against friction as the speed of P increases from 0 m s^{-1} to 4 m s^{-1} , (4)

(b) the coefficient of friction between the particle and the plane. (4)

3.

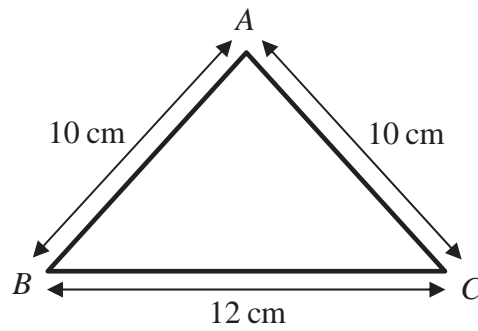


Figure 1

A triangular frame is formed by cutting a uniform rod into 3 pieces which are then joined to form a triangle ABC , where $AB = AC = 10$ cm and $BC = 12$ cm, as shown in Figure 1.

- (a) Find the distance of the centre of mass of the frame from BC . (5)

The frame has total mass M . A particle of mass M is attached to the frame at the mid-point of BC . The frame is then freely suspended from B and hangs in equilibrium.

- (b) Find the size of the angle between BC and the vertical. (4)

5. [In this question **i** and **j** are perpendicular unit vectors in a horizontal plane.]

A ball of mass 0.5 kg is moving with velocity $(10\mathbf{i} + 24\mathbf{j}) \text{ m s}^{-1}$ when it is struck by a bat. Immediately after the impact the ball is moving with velocity $20\mathbf{i} \text{ m s}^{-1}$.

Find

(a) the magnitude of the impulse of the bat on the ball, (4)

(b) the size of the angle between the vector **i** and the impulse exerted by the bat on the ball, (2)

(c) the kinetic energy lost by the ball in the impact. (3)

6.

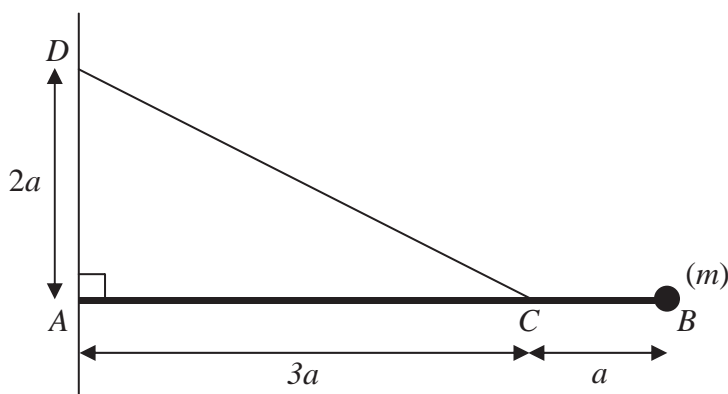


Figure 2

Figure 2 shows a uniform rod AB of mass m and length $4a$. The end A of the rod is freely hinged to a point on a vertical wall. A particle of mass m is attached to the rod at B . One end of a light inextensible string is attached to the rod at C , where $AC = 3a$. The other end of the string is attached to the wall at D , where $AD = 2a$ and D is vertically above A . The rod rests horizontally in equilibrium in a vertical plane perpendicular to the wall and the tension in the string is T .

(a) Show that $T = mg\sqrt{13}$. (5)

The particle of mass m at B is removed from the rod and replaced by a particle of mass M which is attached to the rod at B . The string breaks if the tension exceeds $2mg\sqrt{13}$. Given that the string does not break,

(b) show that $M \leq \frac{5}{2}m$. (3)

7.

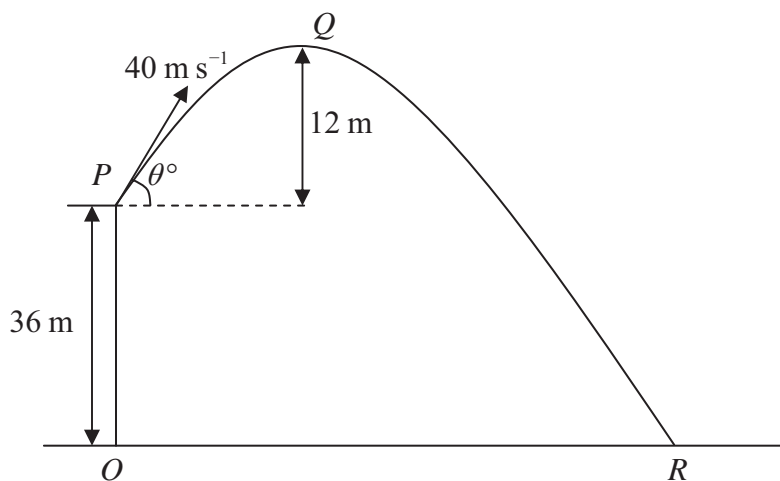


Figure 3

A ball is projected with speed 40 m s^{-1} from a point P on a cliff above horizontal ground. The point O on the ground is vertically below P and OP is 36 m . The ball is projected at an angle θ° to the horizontal. The point Q is the highest point of the path of the ball and is 12 m above the level of P . The ball moves freely under gravity and hits the ground at the point R , as shown in Figure 3. Find

- (a) the value of θ , (3)
- (b) the distance OR , (6)
- (c) the speed of the ball as it hits the ground at R . (3)

Question 7 continued

(Lined area for student answers)

Q7

--	--

(Total 12 marks)

8. A small ball A of mass $3m$ is moving with speed u in a straight line on a smooth horizontal table. The ball collides directly with another small ball B of mass m moving with speed u towards A along the same straight line. The coefficient of restitution between A and B is $\frac{1}{2}$. The balls have the same radius and can be modelled as particles.

(a) Find

- (i) the speed of A immediately after the collision,
- (ii) the speed of B immediately after the collision.

(7)

After the collision B hits a smooth vertical wall which is perpendicular to the direction of motion of B . The coefficient of restitution between B and the wall is $\frac{2}{5}$.

(b) Find the speed of B immediately after hitting the wall.

(2)

The first collision between A and B occurred at a distance $4a$ from the wall. The balls collide again T seconds after the first collision.

(c) Show that $T = \frac{112a}{15u}$.

(6)

Question 8 continued

Handwriting lines for answer continuation.

