

Write your name here

Surname

Other names

**Pearson Edexcel**  
**International**  
**Advanced Level**

Centre Number

--	--	--	--	--

Candidate Number

--	--	--	--	--

# Core Mathematics C12

## Advanced Subsidiary

**Sample Assessment Material**  
**Time: 2 hours 30 minutes**

Paper Reference

**WMA01/01**

**You must have:**

Mathematical Formulae and Statistical Tables (Blue)

Total Marks

--

**Candidates may use any calculator allowed by the regulations of the Joint Council for Qualifications. Calculators must not have the facility for symbolic algebra manipulation, differentiation and integration, or have retrievable mathematical formulae stored in them.**

### Instructions

- Use **black** ink or ball-point pen.
- If pencil is used for diagrams/sketches/graphs it must be dark (HB or B). Coloured pencils and highlighter pens must not be used.
- **Fill in the boxes** at the top of this page with your name, centre number and candidate number.
- Answer **all** questions and ensure that your answers to parts of questions are clearly labelled.
- Answer the questions in the spaces provided  
– *there may be more space than you need.*
- You should show sufficient working to make your methods clear. Answers without working may not gain full credit.
- When a calculator is used, the answer should be given to an appropriate degree of accuracy.

### Information

- The total mark for this paper is 125.
- The marks for **each** question are shown in brackets  
– *use this as a guide as to how much time to spend on each question.*

### Advice

- Read each question carefully before you start to answer it.
- Try to answer every question.
- Check your answers if you have time at the end.

Turn over ►

S44999A

©2013 Pearson Education Ltd.



S 4 4 9 9 9 A 0 1 4 4

**PEARSON**























7. A sequence  $a_1, a_2, a_3, \dots$  is defined by

$$a_1 = 2$$

$$a_{n+1} = 3a_n - c$$

where  $c$  is a constant.

(a) Find an expression for  $a_2$  in terms of  $c$ . **(1)**

Given that  $\sum_{i=1}^3 a_i = 0$

(b) find the value of  $c$ . **(4)**

---

---

---

---

---

---

---

---

---

---

---

---

---

---

---

---

---

---

---

---

---

---

---

---

---

---







9. Given that  $y = 3x^2$ ,

(a) show that  $\log_3 y = 1 + 2 \log_3 x$  **(3)**

(b) Hence, or otherwise, solve the equation

$$1 + 2 \log_3 x = \log_3 (28x - 9)$$
 **(3)**

---

---

---

---

---

---

---

---

---

---

---

---

---

---

---

---

---

---

---

---

---

---

---

---

---

---

---

---

---

---





10.

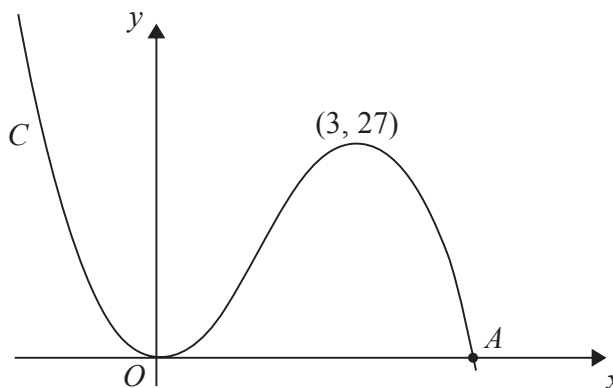


Figure 1

Figure 1 shows a sketch of the curve  $C$  with equation  $y = f(x)$ , where

$$f(x) = x^2(9 - 2x).$$

There is a minimum at the origin, a maximum at the point  $(3, 27)$  and  $C$  cuts the  $x$ -axis at the point  $A$ .

(a) Write down the coordinates of the point  $A$ . (1)

(b) On separate diagrams sketch the curve with equation

(i)  $y = f(x + 3)$ ,

(ii)  $y = f(3x)$ .

On each sketch you should indicate clearly the coordinates of the maximum point and any points where the curves cross or meet the coordinate axes. (6)

The curve with equation  $y = f(x) + k$ , where  $k$  is a constant, has a maximum point at  $(3, 10)$ .

(c) Write down the value of  $k$ . (1)

---

---

---

---

---

---

---

---

---

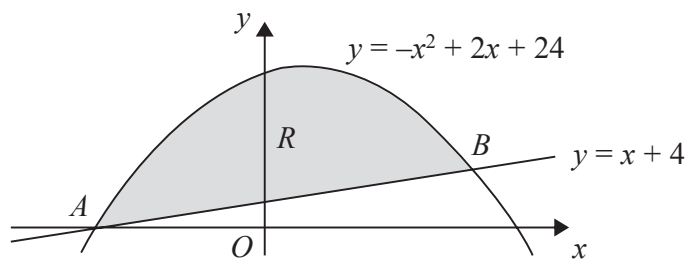
---







11.



**Figure 2**

The straight line with equation  $y = x + 4$  cuts the curve with equation  $y = -x^2 + 2x + 24$  at the points *A* and *B*, as shown in Figure 2.

- (a) Use algebra to find the coordinates of the points *A* and *B*. **(4)**

The finite region *R* is bounded by the straight line and the curve and is shown shaded in Figure 2.

- (b) Use calculus to find the exact area of *R*. **(7)**

---

---

---

---

---

---

---

---

---

---

---

---

---

---

---

---

---

---

---

---

---

---

---

---



12. The circle  $C$  has centre  $A(2, 1)$  and passes through the point  $B(10, 7)$

(a) Find an equation for  $C$ .

**(4)**

The line  $l_1$  is the tangent to  $C$  at the point  $B$ .

(b) Find an equation for  $l_1$

**(4)**

The line  $l_2$  is parallel to  $l_1$  and passes through the mid-point of  $AB$ .

Given that  $l_2$  intersects  $C$  at the points  $P$  and  $Q$ ,

(c) find the length of  $PQ$ , giving your answer in its simplest surd form.

**(3)**

---

---

---

---

---

---

---

---

---

---

---

---

---

---

---

---

---

---

---

---

---

---

---

---

---

---

---

---

---

---

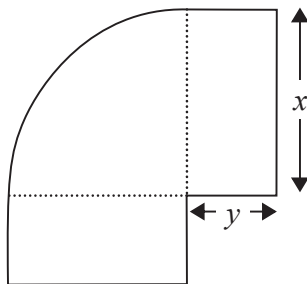








13.



**Figure 3**

Figure 3 shows a flowerbed. Its shape is a quarter of a circle of radius  $x$  metres with two equal rectangles attached to it along its radii. Each rectangle has length equal to  $x$  metres and width equal to  $y$  metres.

Given that the area of the flowerbed is  $4 \text{ m}^2$ ,

(a) show that

$$y = \frac{16 - \pi x^2}{8x} \quad (3)$$

(b) Hence show that the perimeter  $P$  metres of the flowerbed is given by the equation

$$P = \frac{8}{x} + 2x \quad (3)$$

(c) Use calculus to find the minimum value of  $P$ . (5)

---

---

---

---

---

---

---

---

---

---

---

---

---

---

---

---

---

---

---

---

---

---

---

---



Question 13 continued

A series of horizontal lines for writing.

Leave blank

**Question 13 continued**

Lined area for student response.

**(Total 11 marks)**

**Q13**

--	--

14. In this question you must show all stages of your working.  
(Solutions based entirely on graphical or numerical methods are not acceptable.)

(a) Solve for  $0 \leq x < 360^\circ$ , giving your answers in degrees to 1 decimal place,

$$3 \sin(x + 45^\circ) = 2$$

(4)

(b) Find, for  $0 \leq x < 2\pi$ , all the solutions of

$$2 \sin^2 x + 2 = 7 \cos x$$

giving your answers in radians.

(6)

---

---

---

---

---

---

---

---

---

---

---

---

---

---

---

---

---

---

---

---

---

---

---

---



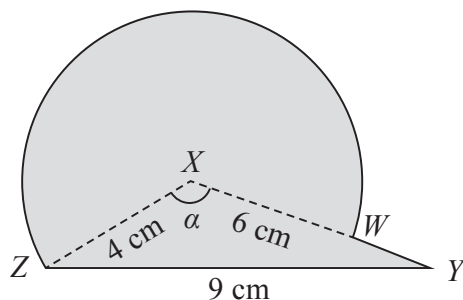


**Question 14 continued**

Handwritten area with horizontal lines for writing.



15.



**Figure 4**

The triangle  $XYZ$  in Figure 4 has  $XY = 6$  cm,  $YZ = 9$  cm,  $ZX = 4$  cm and angle  $ZXY = \alpha$ . The point  $W$  lies on the line  $XY$ .

The circular arc  $ZW$ , in Figure 4 is a major arc of the circle with centre  $X$  and radius 4 cm.

(a) Show that, to 3 significant figures,  $\alpha = 2.22$  radians. (2)

(b) Find the area, in  $\text{cm}^2$ , of the major sector  $XZWX$ . (3)

The region enclosed by the major arc  $ZW$  of the circle and the lines  $WY$  and  $YZ$  is shown shaded in Figure 4.

Calculate

(c) the area of this shaded region, (3)

(d) the perimeter  $ZWYZ$  of this shaded region. (4)

---

---

---

---

---

---

---

---

---

---

---

---

---

---

---

---

---

---

---

---

---

---

---

---



**Question 15 continued**

Leave blank

A series of horizontal lines provided for writing answers.



16. Maria trains for a triathlon, which involves swimming, cycling and running. On the first day of training she swims 1.5 km and then she swims 1.5 km on each of the following days.

- (a) Find the **total** distance that Maria swims in the first 17 days of training. (1)

Maria also runs 1.5 km on the first day of training and on each of the following days she runs 0.25 km further than on the previous day. So she runs 1.75 km on the second day and 2 km on the third day and so on.

- (b) Find how far Maria runs on the 17th day of training. (2)

Maria also cycles 1.5 km on the first day of training and on each of the following days she cycles 5% further than on the previous day.

- (c) Find the **total** distance that Maria cycles in the first 17 days of training. (3)

- (d) Find the **total** distance Maria travels by swimming, running and cycling in the first 17 days of training. (3)

Maria needs to cycle 40 km in the triathlon.

- (e) On which day of training does Maria first cycle more than 40 km? (4)

---

---

---

---

---

---

---

---

---

---

---

---

---

---

---

---

---

---

---

---

---

---

---

---







**Question 16 continued**

Lined area for writing the answer to Question 16 continued.

